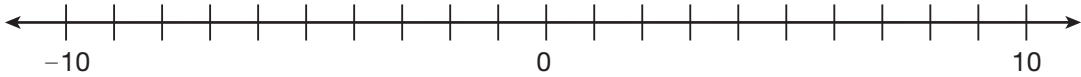


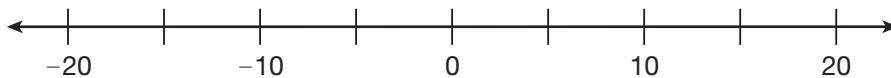
**Practice**

**Directions:** For questions 1 and 2, write the numbers in their correct place on the number line.

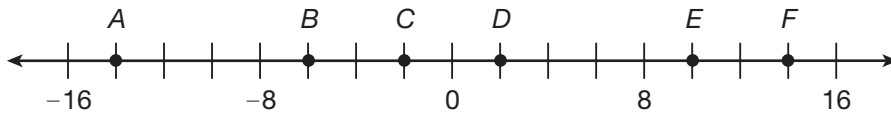
1. 7, -6, -9, 3



2. -12, 3, 18, -19, -3



**Directions:** For questions 3 through 8, use the number line below. Write the integer that belongs at each point.



- |            |            |
|------------|------------|
| 3. A _____ | 6. D _____ |
| 4. B _____ | 7. E _____ |
| 5. C _____ | 8. F _____ |

**Directions:** For questions 9 through 16, write the opposite of the number.

- |              |                |
|--------------|----------------|
| 9. -6 _____  | 13. -80 _____  |
| 10. 11 _____ | 14. -12 _____  |
| 11. 15 _____ | 15. 1202 _____ |
| 12. 77 _____ | 16. -508 _____ |

CCSS: 6.NS.5, 6.NS.6.a

**Directions:** For questions 17 through 21, write the integer that is represented by the **bold words in each sentence**.

17. Owen's kitten weighs **4 ounces more** this month than it did last month. \_\_\_\_\_

18. The height of the skyscraper **increased 25 feet** during construction last week.

\_\_\_\_\_

19. The amount in Beth's bank account **increased 195 dollars**. \_\_\_\_\_

20. A submarine is **400 feet below** the surface of the water. \_\_\_\_\_

21. Antoine hit **8 fewer home runs** than he did last year. \_\_\_\_\_

**Directions:** For questions 22 through 25, write the integer that is represented by the **bold words in each sentence**. Then, interpret what the 0 means in the situation.

22. Holly earned **\$800 more** than she did last year. \_\_\_\_\_

\_\_\_\_\_

23. A desktop computer has a mass of **2 kilograms more** than a notebook computer.

\_\_\_\_\_

\_\_\_\_\_

24. The temperature of a patient **decreased by 2 degrees Celsius**. \_\_\_\_\_

\_\_\_\_\_

25. Isabella is **7 centimeters shorter** than her brother Lorenzo. \_\_\_\_\_

\_\_\_\_\_

Explain how you know whether this integer is negative or positive.

\_\_\_\_\_